




Trouve le volume de chacune des figures ci-dessous,




\_\_\_\_\_  $\text{cm}^3$



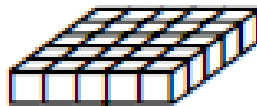
\_\_\_\_\_



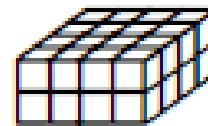
\_\_\_\_\_



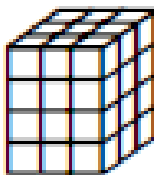
\_\_\_\_\_



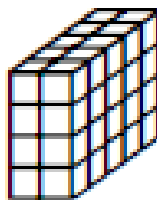
\_\_\_\_\_




\_\_\_\_\_



\_\_\_\_\_



\_\_\_\_\_



\_\_\_\_\_